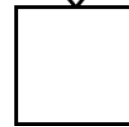

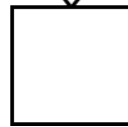

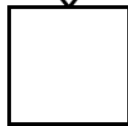








Maak af:

$6 + \square = 10$ $5 + \square = 8$ $4 + \square = 9$



Maak af:

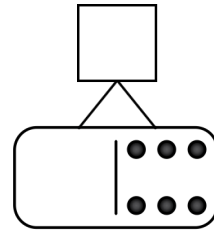
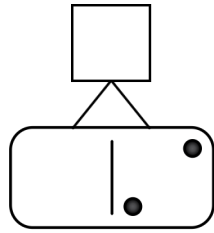
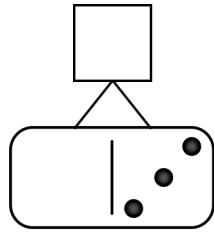
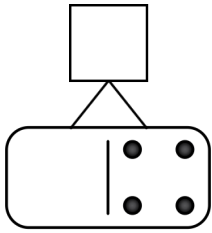
 +  =

Maak af:

5

7

10



Trek een lijn:

8

twee

4

acht

2

vier

$5 = _ + 2$

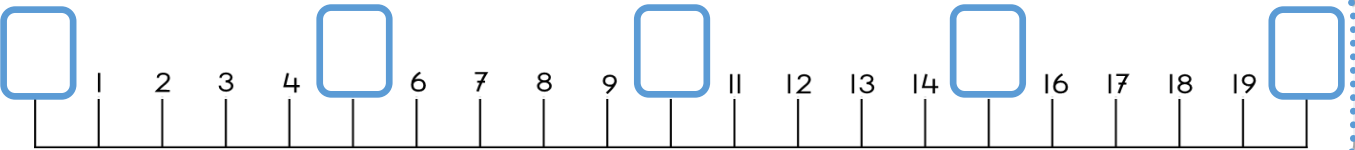
$7 = _ + 4$

$9 = _ + 7$

$6 = _ + 3$

$8 = _ + 2$

$4 = _ + 3$




De buren van:

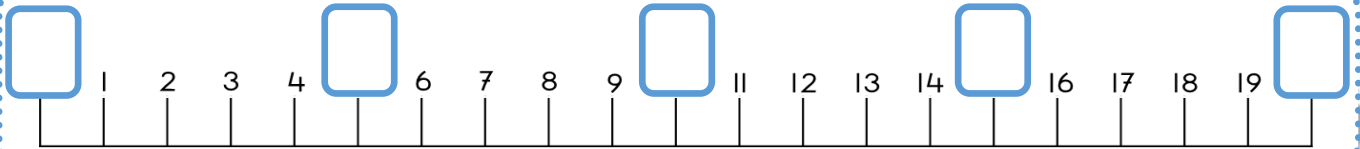
7

3

5

9





De buren van:

<input type="text"/>	7	<input type="text"/>	<input type="text"/>	3	<input type="text"/>
<input type="text"/>	5	<input type="text"/>	<input type="text"/>	9	<input type="text"/>

Een uur later

